



UNIVERSITY OF CAMBRIDGE INTERNATIONAL EXAMINATIONS
General Certificate of Education Advanced Subsidiary Level and Advanced Level

GEOGRAPHY

9696/31

Paper 3 Advanced Human Options

October/November 2009

INSERT

1 hour 30 minutes

READ THESE INSTRUCTIONS FIRST

This Insert contains the Table and all the Figures referred to in the questions.

This document consists of **4** printed pages.



Table 1 for Question 1

**Agricultural data for low, medium and high income farming households
in Burkina Faso, 2000**

agricultural data (average values)	low income	medium income	high income
number of sacks of organic fertiliser (manure) applied per hectare per year	0.2	3.9	7.1
number of sacks of inorganic (artificial) fertiliser applied per hectare per year	1.3	2.2	1.7
percentage field area worked by draught animals	48	79	91
number of draught animals owned	0*	2	4.2
number of trees per hectare	15.2	15.4	9.7
percentage area under sorghum (staple food crop)	46.1	27.9	28.8
percentage area under maize (food and cash crop)	18.4	29.1	33.2
total area cultivated (hectares)	2.0	2.6	6.8

*some households borrow or rent draught animals to work the fields

Fig. 1 for Question 3

Primary energy supply for two countries, 2004

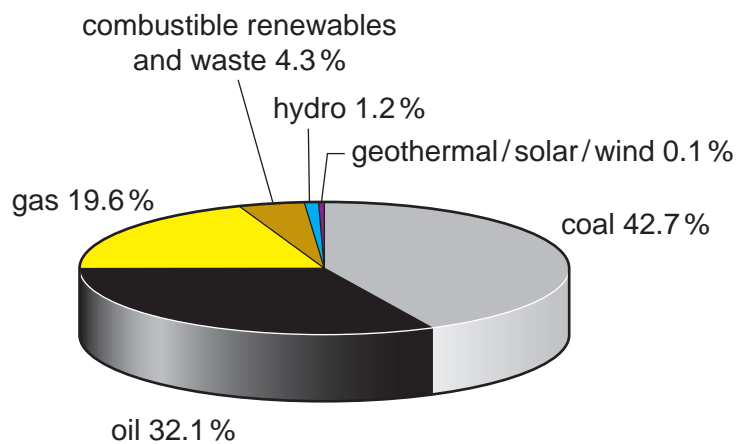
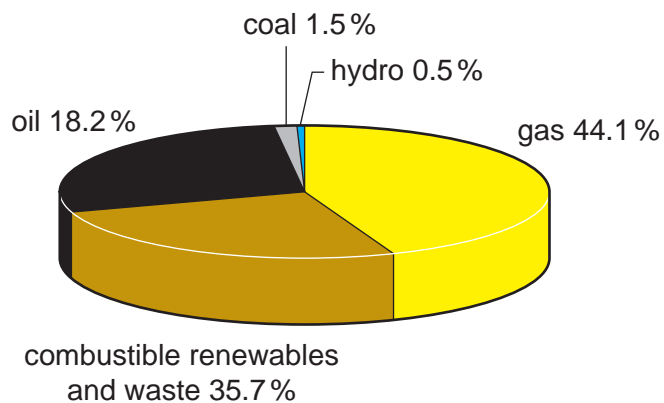
Country A, an MEDC
Total = 116 Mtoe (Million tonnes of oil equivalent)**Country B, an LEDC**
Total = 22.8 Mtoe (Million tonnes of oil equivalent)

Fig. 2 for Question 6

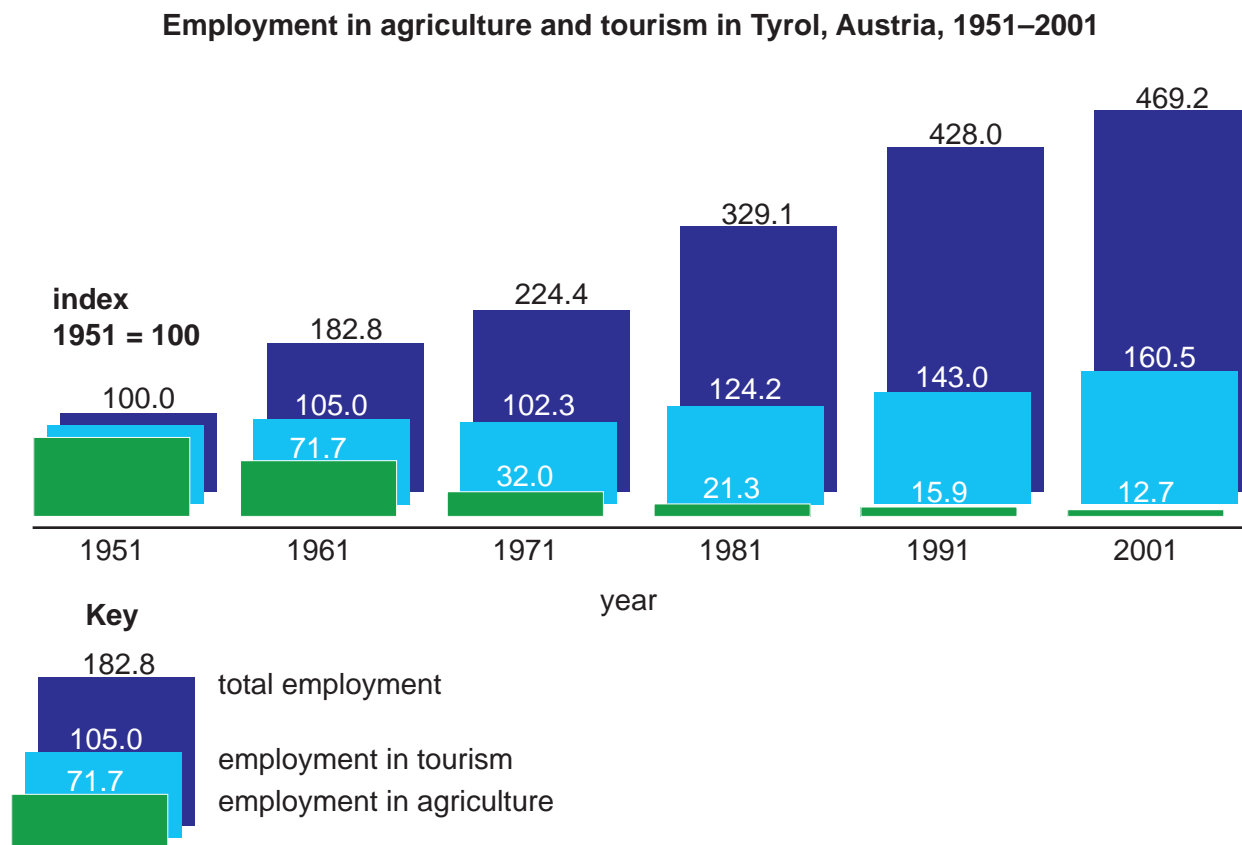
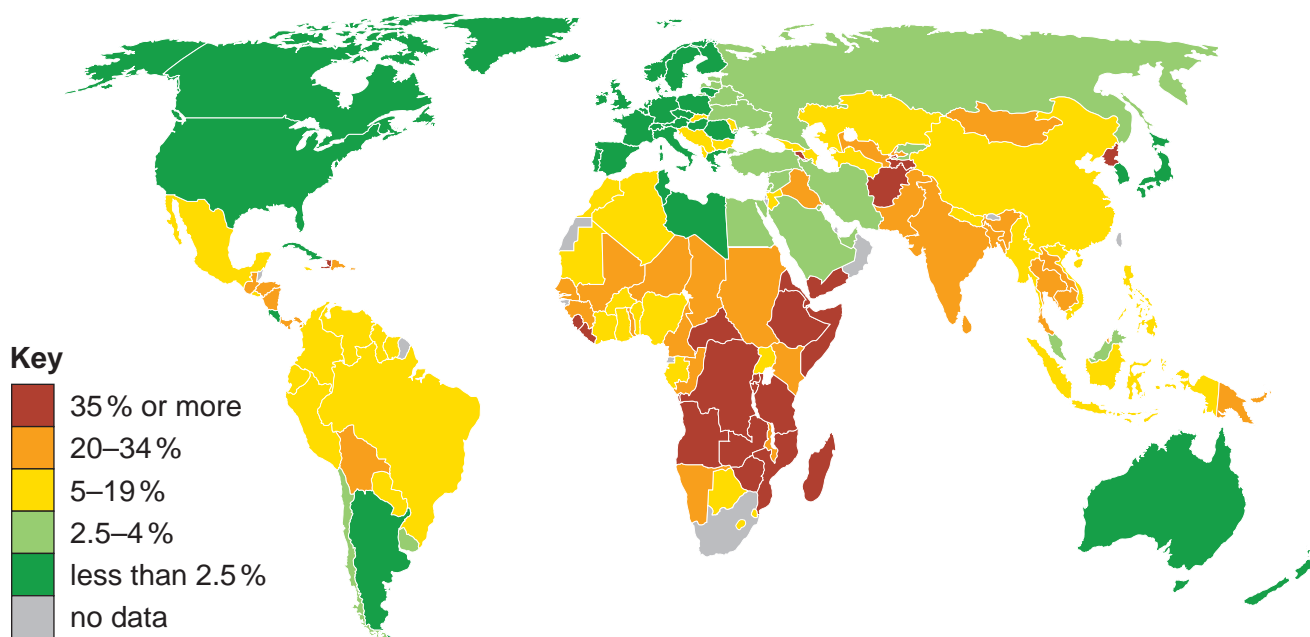


Fig. 3 for Question 7

Percentage of undernourished population, 2003



Permission to reproduce items where third-party owned material protected by copyright is included has been sought and cleared where possible. Every reasonable effort has been made by the publisher (UCLES) to trace copyright holders, but if any items requiring clearance have unwittingly been included, the publisher will be pleased to make amends at the earliest possible opportunity.

University of Cambridge International Examinations is part of the Cambridge Assessment Group. Cambridge Assessment is the brand name of University of Cambridge Local Examinations Syndicate (UCLES), which is itself a department of the University of Cambridge.